



Solve each problem.

Answers

$$\begin{array}{r} 1) \quad 825 \\ - 296 \\ \hline \end{array}$$

$$\begin{array}{r} 2) \quad 351 \\ - 273 \\ \hline \end{array}$$

$$\begin{array}{r} 3) \quad 811 \\ - 633 \\ \hline \end{array}$$

$$\begin{array}{r} 4) \quad 911 \\ - 622 \\ \hline \end{array}$$

$$\begin{array}{r} 5) \quad 818 \\ - 739 \\ \hline \end{array}$$

$$\begin{array}{r} 6) \quad 433 \\ - 347 \\ \hline \end{array}$$

$$\begin{array}{r} 7) \quad 914 \\ - 745 \\ \hline \end{array}$$

$$\begin{array}{r} 8) \quad 812 \\ - 648 \\ \hline \end{array}$$

$$\begin{array}{r} 9) \quad 713 \\ - 454 \\ \hline \end{array}$$

$$\begin{array}{r} 10) \quad 435 \\ - 358 \\ \hline \end{array}$$

$$\begin{array}{r} 11) \quad 752 \\ - 674 \\ \hline \end{array}$$

$$\begin{array}{r} 12) \quad 938 \\ - 769 \\ \hline \end{array}$$

$$\begin{array}{r} 13) \quad 511 \\ - 328 \\ \hline \end{array}$$

$$\begin{array}{r} 14) \quad 634 \\ - 346 \\ \hline \end{array}$$

$$\begin{array}{r} 15) \quad 932 \\ - 774 \\ \hline \end{array}$$

$$\begin{array}{r} 16) \quad 921 \\ - 573 \\ \hline \end{array}$$

$$\begin{array}{r} 17) \quad 344 \\ - 288 \\ \hline \end{array}$$

$$\begin{array}{r} 18) \quad 733 \\ - 555 \\ \hline \end{array}$$

$$\begin{array}{r} 19) \quad 924 \\ - 765 \\ \hline \end{array}$$

$$\begin{array}{r} 20) \quad 542 \\ - 453 \\ \hline \end{array}$$

1. _____

2. _____

3. _____

4. _____

5. _____

6. _____

7. _____

8. _____

9. _____

10. _____

11. _____

12. _____

13. _____

14. _____

15. _____

16. _____

17. _____

18. _____

19. _____

20. _____



Solve each problem.

$$\begin{array}{r} 1) \quad 825 \\ - 296 \\ \hline 529 \end{array}$$

$$\begin{array}{r} 2) \quad 351 \\ - 273 \\ \hline 78 \end{array}$$

$$\begin{array}{r} 3) \quad 811 \\ - 633 \\ \hline 178 \end{array}$$

$$\begin{array}{r} 4) \quad 911 \\ - 622 \\ \hline 289 \end{array}$$

$$\begin{array}{r} 5) \quad 818 \\ - 739 \\ \hline 79 \end{array}$$

$$\begin{array}{r} 6) \quad 433 \\ - 347 \\ \hline 86 \end{array}$$

$$\begin{array}{r} 7) \quad 914 \\ - 745 \\ \hline 169 \end{array}$$

$$\begin{array}{r} 8) \quad 812 \\ - 648 \\ \hline 164 \end{array}$$

$$\begin{array}{r} 9) \quad 713 \\ - 454 \\ \hline 259 \end{array}$$

$$\begin{array}{r} 10) \quad 435 \\ - 358 \\ \hline 77 \end{array}$$

$$\begin{array}{r} 11) \quad 752 \\ - 674 \\ \hline 78 \end{array}$$

$$\begin{array}{r} 12) \quad 938 \\ - 769 \\ \hline 169 \end{array}$$

$$\begin{array}{r} 13) \quad 511 \\ - 328 \\ \hline 183 \end{array}$$

$$\begin{array}{r} 14) \quad 634 \\ - 346 \\ \hline 288 \end{array}$$

$$\begin{array}{r} 15) \quad 932 \\ - 774 \\ \hline 158 \end{array}$$

$$\begin{array}{r} 16) \quad 921 \\ - 573 \\ \hline 348 \end{array}$$

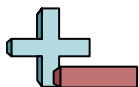
$$\begin{array}{r} 17) \quad 344 \\ - 288 \\ \hline 56 \end{array}$$

$$\begin{array}{r} 18) \quad 733 \\ - 555 \\ \hline 178 \end{array}$$

$$\begin{array}{r} 19) \quad 924 \\ - 765 \\ \hline 159 \end{array}$$

$$\begin{array}{r} 20) \quad 542 \\ - 453 \\ \hline 89 \end{array}$$

Answers1. 5292. 783. 1784. 2895. 796. 867. 1698. 1649. 25910. 7711. 7812. 16913. 18314. 28815. 15816. 34817. 5618. 17819. 15920. 89



Solve each problem.

Answers

259	169	78	164
78	79	169	178
289	529	86	77

1. _____
2. _____
3. _____
4. _____
5. _____
6. _____
7. _____
8. _____
9. _____
10. _____
11. _____
12. _____

1)
$$\begin{array}{r} 825 \\ - 296 \\ \hline \end{array}$$

2)
$$\begin{array}{r} 351 \\ - 273 \\ \hline \end{array}$$

3)
$$\begin{array}{r} 811 \\ - 633 \\ \hline \end{array}$$

4)
$$\begin{array}{r} 911 \\ - 622 \\ \hline \end{array}$$

5)
$$\begin{array}{r} 818 \\ - 739 \\ \hline \end{array}$$

6)
$$\begin{array}{r} 433 \\ - 347 \\ \hline \end{array}$$

7)
$$\begin{array}{r} 914 \\ - 745 \\ \hline \end{array}$$

8)
$$\begin{array}{r} 812 \\ - 648 \\ \hline \end{array}$$

9)
$$\begin{array}{r} 713 \\ - 454 \\ \hline \end{array}$$

10)
$$\begin{array}{r} 435 \\ - 358 \\ \hline \end{array}$$

11)
$$\begin{array}{r} 752 \\ - 674 \\ \hline \end{array}$$

12)
$$\begin{array}{r} 938 \\ - 769 \\ \hline \end{array}$$



Solve each problem.

Answers

$$\begin{array}{r} 1) \quad 724 \\ - 638 \\ \hline \end{array}$$

$$\begin{array}{r} 2) \quad 531 \\ - 263 \\ \hline \end{array}$$

$$\begin{array}{r} 3) \quad 711 \\ - 522 \\ \hline \end{array}$$

$$\begin{array}{r} 4) \quad 811 \\ - 738 \\ \hline \end{array}$$

$$\begin{array}{r} 5) \quad 916 \\ - 727 \\ \hline \end{array}$$

$$\begin{array}{r} 6) \quad 831 \\ - 343 \\ \hline \end{array}$$

$$\begin{array}{r} 7) \quad 722 \\ - 698 \\ \hline \end{array}$$

$$\begin{array}{r} 8) \quad 431 \\ - 298 \\ \hline \end{array}$$

$$\begin{array}{r} 9) \quad 463 \\ - 185 \\ \hline \end{array}$$

$$\begin{array}{r} 10) \quad 772 \\ - 389 \\ \hline \end{array}$$

$$\begin{array}{r} 11) \quad 718 \\ - 629 \\ \hline \end{array}$$

$$\begin{array}{r} 12) \quad 912 \\ - 693 \\ \hline \end{array}$$

$$\begin{array}{r} 13) \quad 911 \\ - 526 \\ \hline \end{array}$$

$$\begin{array}{r} 14) \quad 921 \\ - 676 \\ \hline \end{array}$$

$$\begin{array}{r} 15) \quad 912 \\ - 445 \\ \hline \end{array}$$

$$\begin{array}{r} 16) \quad 826 \\ - 267 \\ \hline \end{array}$$

$$\begin{array}{r} 17) \quad 976 \\ - 488 \\ \hline \end{array}$$

$$\begin{array}{r} 18) \quad 914 \\ - 735 \\ \hline \end{array}$$

$$\begin{array}{r} 19) \quad 513 \\ - 328 \\ \hline \end{array}$$

$$\begin{array}{r} 20) \quad 612 \\ - 325 \\ \hline \end{array}$$

1. _____

2. _____

3. _____

4. _____

5. _____

6. _____

7. _____

8. _____

9. _____

10. _____

11. _____

12. _____

13. _____

14. _____

15. _____

16. _____

17. _____

18. _____

19. _____

20. _____



Solve each problem.

$$\begin{array}{r} 1) \quad 724 \\ - 638 \\ \hline 86 \end{array}$$

$$\begin{array}{r} 2) \quad 531 \\ - 263 \\ \hline 268 \end{array}$$

$$\begin{array}{r} 3) \quad 711 \\ - 522 \\ \hline 189 \end{array}$$

$$\begin{array}{r} 4) \quad 811 \\ - 738 \\ \hline 73 \end{array}$$

$$\begin{array}{r} 5) \quad 916 \\ - 727 \\ \hline 189 \end{array}$$

$$\begin{array}{r} 6) \quad 831 \\ - 343 \\ \hline 488 \end{array}$$

$$\begin{array}{r} 7) \quad 722 \\ - 698 \\ \hline 24 \end{array}$$

$$\begin{array}{r} 8) \quad 431 \\ - 298 \\ \hline 133 \end{array}$$

$$\begin{array}{r} 9) \quad 463 \\ - 185 \\ \hline 278 \end{array}$$

$$\begin{array}{r} 10) \quad 772 \\ - 389 \\ \hline 383 \end{array}$$

$$\begin{array}{r} 11) \quad 718 \\ - 629 \\ \hline 89 \end{array}$$

$$\begin{array}{r} 12) \quad 912 \\ - 693 \\ \hline 219 \end{array}$$

$$\begin{array}{r} 13) \quad 911 \\ - 526 \\ \hline 385 \end{array}$$

$$\begin{array}{r} 14) \quad 921 \\ - 676 \\ \hline 245 \end{array}$$

$$\begin{array}{r} 15) \quad 912 \\ - 445 \\ \hline 467 \end{array}$$

$$\begin{array}{r} 16) \quad 826 \\ - 267 \\ \hline 559 \end{array}$$

$$\begin{array}{r} 17) \quad 976 \\ - 488 \\ \hline 488 \end{array}$$

$$\begin{array}{r} 18) \quad 914 \\ - 735 \\ \hline 179 \end{array}$$

$$\begin{array}{r} 19) \quad 513 \\ - 328 \\ \hline 185 \end{array}$$

$$\begin{array}{r} 20) \quad 612 \\ - 325 \\ \hline 287 \end{array}$$

Answers

1. 86

2. 268

3. 189

4. 73

5. 189

6. 488

7. 24

8. 133

9. 278

10. 383

11. 89

12. 219

13. 385

14. 245

15. 467

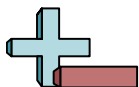
16. 559

17. 488

18. 179

19. 185

20. 287



Solve each problem.

Answers

189	219	189	133
278	488	73	383
89	268	24	86

$$\begin{array}{r} 1) \quad 724 \\ - 638 \\ \hline \end{array}$$

$$\begin{array}{r} 2) \quad 531 \\ - 263 \\ \hline \end{array}$$

$$\begin{array}{r} 3) \quad 711 \\ - 522 \\ \hline \end{array}$$

$$\begin{array}{r} 4) \quad 811 \\ - 738 \\ \hline \end{array}$$

$$\begin{array}{r} 5) \quad 916 \\ - 727 \\ \hline \end{array}$$

$$\begin{array}{r} 6) \quad 831 \\ - 343 \\ \hline \end{array}$$

$$\begin{array}{r} 7) \quad 722 \\ - 698 \\ \hline \end{array}$$

$$\begin{array}{r} 8) \quad 431 \\ - 298 \\ \hline \end{array}$$

$$\begin{array}{r} 9) \quad 463 \\ - 185 \\ \hline \end{array}$$

$$\begin{array}{r} 10) \quad 772 \\ - 389 \\ \hline \end{array}$$

$$\begin{array}{r} 11) \quad 718 \\ - 629 \\ \hline \end{array}$$

$$\begin{array}{r} 12) \quad 912 \\ - 693 \\ \hline \end{array}$$

1. _____
2. _____
3. _____
4. _____
5. _____
6. _____
7. _____
8. _____
9. _____
10. _____
11. _____
12. _____



Solve each problem.

Answers

1)
$$\begin{array}{r} 512 \\ - 224 \\ \hline \end{array}$$

2)
$$\begin{array}{r} 542 \\ - 369 \\ \hline \end{array}$$

3)
$$\begin{array}{r} 611 \\ - 132 \\ \hline \end{array}$$

4)
$$\begin{array}{r} 621 \\ - 352 \\ \hline \end{array}$$

5)
$$\begin{array}{r} 911 \\ - 824 \\ \hline \end{array}$$

6)
$$\begin{array}{r} 711 \\ - 526 \\ \hline \end{array}$$

7)
$$\begin{array}{r} 422 \\ - 244 \\ \hline \end{array}$$

8)
$$\begin{array}{r} 826 \\ - 569 \\ \hline \end{array}$$

9)
$$\begin{array}{r} 553 \\ - 376 \\ \hline \end{array}$$

10)
$$\begin{array}{r} 942 \\ - 156 \\ \hline \end{array}$$

11)
$$\begin{array}{r} 743 \\ - 666 \\ \hline \end{array}$$

12)
$$\begin{array}{r} 912 \\ - 323 \\ \hline \end{array}$$

13)
$$\begin{array}{r} 712 \\ - 628 \\ \hline \end{array}$$

14)
$$\begin{array}{r} 915 \\ - 828 \\ \hline \end{array}$$

15)
$$\begin{array}{r} 926 \\ - 898 \\ \hline \end{array}$$

16)
$$\begin{array}{r} 941 \\ - 762 \\ \hline \end{array}$$

17)
$$\begin{array}{r} 654 \\ - 195 \\ \hline \end{array}$$

18)
$$\begin{array}{r} 961 \\ - 572 \\ \hline \end{array}$$

19)
$$\begin{array}{r} 967 \\ - 878 \\ \hline \end{array}$$

20)
$$\begin{array}{r} 751 \\ - 493 \\ \hline \end{array}$$

1. _____

2. _____

3. _____

4. _____

5. _____

6. _____

7. _____

8. _____

9. _____

10. _____

11. _____

12. _____

13. _____

14. _____

15. _____

16. _____

17. _____

18. _____

19. _____

20. _____



Solve each problem.

$$\begin{array}{r} 1) \quad 512 \\ - 224 \\ \hline 288 \end{array}$$

$$\begin{array}{r} 2) \quad 542 \\ - 369 \\ \hline 173 \end{array}$$

$$\begin{array}{r} 3) \quad 611 \\ - 132 \\ \hline 479 \end{array}$$

$$\begin{array}{r} 4) \quad 621 \\ - 352 \\ \hline 269 \end{array}$$

$$\begin{array}{r} 5) \quad 911 \\ - 824 \\ \hline 87 \end{array}$$

$$\begin{array}{r} 6) \quad 711 \\ - 526 \\ \hline 185 \end{array}$$

$$\begin{array}{r} 7) \quad 422 \\ - 244 \\ \hline 178 \end{array}$$

$$\begin{array}{r} 8) \quad 826 \\ - 569 \\ \hline 257 \end{array}$$

$$\begin{array}{r} 9) \quad 553 \\ - 376 \\ \hline 177 \end{array}$$

$$\begin{array}{r} 10) \quad 942 \\ - 156 \\ \hline 786 \end{array}$$

$$\begin{array}{r} 11) \quad 743 \\ - 666 \\ \hline 77 \end{array}$$

$$\begin{array}{r} 12) \quad 912 \\ - 323 \\ \hline 589 \end{array}$$

$$\begin{array}{r} 13) \quad 712 \\ - 628 \\ \hline 84 \end{array}$$

$$\begin{array}{r} 14) \quad 915 \\ - 828 \\ \hline 87 \end{array}$$

$$\begin{array}{r} 15) \quad 926 \\ - 898 \\ \hline 28 \end{array}$$

$$\begin{array}{r} 16) \quad 941 \\ - 762 \\ \hline 179 \end{array}$$

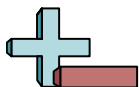
$$\begin{array}{r} 17) \quad 654 \\ - 195 \\ \hline 459 \end{array}$$

$$\begin{array}{r} 18) \quad 961 \\ - 572 \\ \hline 389 \end{array}$$

$$\begin{array}{r} 19) \quad 967 \\ - 878 \\ \hline 89 \end{array}$$

$$\begin{array}{r} 20) \quad 751 \\ - 493 \\ \hline 258 \end{array}$$

Answers1. 2882. 1733. 4794. 2695. 876. 1857. 1788. 2579. 17710. 78611. 7712. 58913. 8414. 8715. 2816. 17917. 45918. 38919. 8920. 258



Solve each problem.

Answers

178

257

87

185

269

589

479

173

288

786

177

77

1. _____

2. _____

3. _____

4. _____

5. _____

6. _____

7. _____

8. _____

9. _____

10. _____

11. _____

12. _____

1)
$$\begin{array}{r} 512 \\ - 224 \\ \hline \end{array}$$

2)
$$\begin{array}{r} 542 \\ - 369 \\ \hline \end{array}$$

3)
$$\begin{array}{r} 611 \\ - 132 \\ \hline \end{array}$$

4)
$$\begin{array}{r} 621 \\ - 352 \\ \hline \end{array}$$

5)
$$\begin{array}{r} 911 \\ - 824 \\ \hline \end{array}$$

6)
$$\begin{array}{r} 711 \\ - 526 \\ \hline \end{array}$$

7)
$$\begin{array}{r} 422 \\ - 244 \\ \hline \end{array}$$

8)
$$\begin{array}{r} 826 \\ - 569 \\ \hline \end{array}$$

9)
$$\begin{array}{r} 553 \\ - 376 \\ \hline \end{array}$$

10)
$$\begin{array}{r} 942 \\ - 156 \\ \hline \end{array}$$

11)
$$\begin{array}{r} 743 \\ - 666 \\ \hline \end{array}$$

12)
$$\begin{array}{r} 912 \\ - 323 \\ \hline \end{array}$$



Solve each problem.

Answers

1)
$$\begin{array}{r} 424 \\ - 235 \\ \hline \end{array}$$

2)
$$\begin{array}{r} 816 \\ - 578 \\ \hline \end{array}$$

3)
$$\begin{array}{r} 811 \\ - 764 \\ \hline \end{array}$$

4)
$$\begin{array}{r} 731 \\ - 348 \\ \hline \end{array}$$

5)
$$\begin{array}{r} 834 \\ - 768 \\ \hline \end{array}$$

6)
$$\begin{array}{r} 221 \\ - 143 \\ \hline \end{array}$$

7)
$$\begin{array}{r} 323 \\ - 137 \\ \hline \end{array}$$

8)
$$\begin{array}{r} 911 \\ - 844 \\ \hline \end{array}$$

9)
$$\begin{array}{r} 921 \\ - 834 \\ \hline \end{array}$$

10)
$$\begin{array}{r} 752 \\ - 576 \\ \hline \end{array}$$

11)
$$\begin{array}{r} 944 \\ - 258 \\ \hline \end{array}$$

12)
$$\begin{array}{r} 854 \\ - 796 \\ \hline \end{array}$$

13)
$$\begin{array}{r} 883 \\ - 298 \\ \hline \end{array}$$

14)
$$\begin{array}{r} 922 \\ - 563 \\ \hline \end{array}$$

15)
$$\begin{array}{r} 837 \\ - 779 \\ \hline \end{array}$$

16)
$$\begin{array}{r} 714 \\ - 137 \\ \hline \end{array}$$

17)
$$\begin{array}{r} 873 \\ - 794 \\ \hline \end{array}$$

18)
$$\begin{array}{r} 644 \\ - 366 \\ \hline \end{array}$$

19)
$$\begin{array}{r} 931 \\ - 593 \\ \hline \end{array}$$

20)
$$\begin{array}{r} 822 \\ - 795 \\ \hline \end{array}$$

1. _____
2. _____
3. _____
4. _____
5. _____
6. _____
7. _____
8. _____
9. _____
10. _____
11. _____
12. _____
13. _____
14. _____
15. _____
16. _____
17. _____
18. _____
19. _____
20. _____



Solve each problem.

$$\begin{array}{r} 1) \quad 424 \\ - 235 \\ \hline 189 \end{array}$$

$$\begin{array}{r} 2) \quad 816 \\ - 578 \\ \hline 238 \end{array}$$

$$\begin{array}{r} 3) \quad 811 \\ - 764 \\ \hline 47 \end{array}$$

$$\begin{array}{r} 4) \quad 731 \\ - 348 \\ \hline 383 \end{array}$$

$$\begin{array}{r} 5) \quad 834 \\ - 768 \\ \hline 66 \end{array}$$

$$\begin{array}{r} 6) \quad 221 \\ - 143 \\ \hline 78 \end{array}$$

$$\begin{array}{r} 7) \quad 323 \\ - 137 \\ \hline 186 \end{array}$$

$$\begin{array}{r} 8) \quad 911 \\ - 844 \\ \hline 67 \end{array}$$

$$\begin{array}{r} 9) \quad 921 \\ - 834 \\ \hline 87 \end{array}$$

$$\begin{array}{r} 10) \quad 752 \\ - 576 \\ \hline 176 \end{array}$$

$$\begin{array}{r} 11) \quad 944 \\ - 258 \\ \hline 686 \end{array}$$

$$\begin{array}{r} 12) \quad 854 \\ - 796 \\ \hline 58 \end{array}$$

$$\begin{array}{r} 13) \quad 883 \\ - 298 \\ \hline 585 \end{array}$$

$$\begin{array}{r} 14) \quad 922 \\ - 563 \\ \hline 359 \end{array}$$

$$\begin{array}{r} 15) \quad 837 \\ - 779 \\ \hline 58 \end{array}$$

$$\begin{array}{r} 16) \quad 714 \\ - 137 \\ \hline 577 \end{array}$$

$$\begin{array}{r} 17) \quad 873 \\ - 794 \\ \hline 79 \end{array}$$

$$\begin{array}{r} 18) \quad 644 \\ - 366 \\ \hline 278 \end{array}$$

$$\begin{array}{r} 19) \quad 931 \\ - 593 \\ \hline 338 \end{array}$$

$$\begin{array}{r} 20) \quad 822 \\ - 795 \\ \hline 27 \end{array}$$

Answers

1. 189

2. 238

3. 47

4. 383

5. 66

6. 78

7. 186

8. 67

9. 87

10. 176

11. 686

12. 58

13. 585

14. 359

15. 58

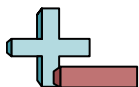
16. 577

17. 79

18. 278

19. 338

20. 27



Solve each problem.

Answers

186	383	238	78
189	66	58	67
47	87	686	176

$$\begin{array}{r} 1) \quad 424 \\ - 235 \\ \hline \end{array}$$

$$\begin{array}{r} 2) \quad 816 \\ - 578 \\ \hline \end{array}$$

$$\begin{array}{r} 3) \quad 811 \\ - 764 \\ \hline \end{array}$$

$$\begin{array}{r} 4) \quad 731 \\ - 348 \\ \hline \end{array}$$

$$\begin{array}{r} 5) \quad 834 \\ - 768 \\ \hline \end{array}$$

$$\begin{array}{r} 6) \quad 221 \\ - 143 \\ \hline \end{array}$$

$$\begin{array}{r} 7) \quad 323 \\ - 137 \\ \hline \end{array}$$

$$\begin{array}{r} 8) \quad 911 \\ - 844 \\ \hline \end{array}$$

$$\begin{array}{r} 9) \quad 921 \\ - 834 \\ \hline \end{array}$$

$$\begin{array}{r} 10) \quad 752 \\ - 576 \\ \hline \end{array}$$

$$\begin{array}{r} 11) \quad 944 \\ - 258 \\ \hline \end{array}$$

$$\begin{array}{r} 12) \quad 854 \\ - 796 \\ \hline \end{array}$$

1. _____
2. _____
3. _____
4. _____
5. _____
6. _____
7. _____
8. _____
9. _____
10. _____
11. _____
12. _____



Solve each problem.

Answers

$$\begin{array}{r} 1) \quad 511 \\ - 422 \\ \hline \end{array}$$

$$\begin{array}{r} 2) \quad 721 \\ - 637 \\ \hline \end{array}$$

$$\begin{array}{r} 3) \quad 642 \\ - 575 \\ \hline \end{array}$$

$$\begin{array}{r} 4) \quad 923 \\ - 245 \\ \hline \end{array}$$

$$\begin{array}{r} 5) \quad 211 \\ - 162 \\ \hline \end{array}$$

$$\begin{array}{r} 6) \quad 932 \\ - 443 \\ \hline \end{array}$$

$$\begin{array}{r} 7) \quad 931 \\ - 887 \\ \hline \end{array}$$

$$\begin{array}{r} 8) \quad 926 \\ - 879 \\ \hline \end{array}$$

$$\begin{array}{r} 9) \quad 231 \\ - 192 \\ \hline \end{array}$$

$$\begin{array}{r} 10) \quad 414 \\ - 135 \\ \hline \end{array}$$

$$\begin{array}{r} 11) \quad 921 \\ - 732 \\ \hline \end{array}$$

$$\begin{array}{r} 12) \quad 914 \\ - 837 \\ \hline \end{array}$$

$$\begin{array}{r} 13) \quad 812 \\ - 124 \\ \hline \end{array}$$

$$\begin{array}{r} 14) \quad 741 \\ - 277 \\ \hline \end{array}$$

$$\begin{array}{r} 15) \quad 752 \\ - 496 \\ \hline \end{array}$$

$$\begin{array}{r} 16) \quad 813 \\ - 635 \\ \hline \end{array}$$

$$\begin{array}{r} 17) \quad 952 \\ - 876 \\ \hline \end{array}$$

$$\begin{array}{r} 18) \quad 851 \\ - 166 \\ \hline \end{array}$$

$$\begin{array}{r} 19) \quad 933 \\ - 479 \\ \hline \end{array}$$

$$\begin{array}{r} 20) \quad 323 \\ - 234 \\ \hline \end{array}$$

1. _____

2. _____

3. _____

4. _____

5. _____

6. _____

7. _____

8. _____

9. _____

10. _____

11. _____

12. _____

13. _____

14. _____

15. _____

16. _____

17. _____

18. _____

19. _____

20. _____



Solve each problem.

$$\begin{array}{r} 1) \quad 511 \\ - 422 \\ \hline 89 \end{array}$$

$$\begin{array}{r} 2) \quad 721 \\ - 637 \\ \hline 84 \end{array}$$

$$\begin{array}{r} 3) \quad 642 \\ - 575 \\ \hline 67 \end{array}$$

$$\begin{array}{r} 4) \quad 923 \\ - 245 \\ \hline 678 \end{array}$$

$$\begin{array}{r} 5) \quad 211 \\ - 162 \\ \hline 49 \end{array}$$

$$\begin{array}{r} 6) \quad 932 \\ - 443 \\ \hline 489 \end{array}$$

$$\begin{array}{r} 7) \quad 931 \\ - 887 \\ \hline 44 \end{array}$$

$$\begin{array}{r} 8) \quad 926 \\ - 879 \\ \hline 47 \end{array}$$

$$\begin{array}{r} 9) \quad 231 \\ - 192 \\ \hline 39 \end{array}$$

$$\begin{array}{r} 10) \quad 414 \\ - 135 \\ \hline 279 \end{array}$$

$$\begin{array}{r} 11) \quad 921 \\ - 732 \\ \hline 189 \end{array}$$

$$\begin{array}{r} 12) \quad 914 \\ - 837 \\ \hline 77 \end{array}$$

$$\begin{array}{r} 13) \quad 812 \\ - 124 \\ \hline 688 \end{array}$$

$$\begin{array}{r} 14) \quad 741 \\ - 277 \\ \hline 464 \end{array}$$

$$\begin{array}{r} 15) \quad 752 \\ - 496 \\ \hline 256 \end{array}$$

$$\begin{array}{r} 16) \quad 813 \\ - 635 \\ \hline 178 \end{array}$$

$$\begin{array}{r} 17) \quad 952 \\ - 876 \\ \hline 76 \end{array}$$

$$\begin{array}{r} 18) \quad 851 \\ - 166 \\ \hline 685 \end{array}$$

$$\begin{array}{r} 19) \quad 933 \\ - 479 \\ \hline 454 \end{array}$$

$$\begin{array}{r} 20) \quad 323 \\ - 234 \\ \hline 89 \end{array}$$

Answers1. 892. 843. 674. 6785. 496. 4897. 448. 479. 3910. 27911. 18912. 7713. 68814. 46415. 25616. 17817. 7618. 68519. 45420. 89



Solve each problem.

Answers

77	47	678	89
49	67	279	39
489	189	44	84

1)
$$\begin{array}{r} 511 \\ - 422 \\ \hline \end{array}$$

2)
$$\begin{array}{r} 721 \\ - 637 \\ \hline \end{array}$$

3)
$$\begin{array}{r} 642 \\ - 575 \\ \hline \end{array}$$

4)
$$\begin{array}{r} 923 \\ - 245 \\ \hline \end{array}$$

5)
$$\begin{array}{r} 211 \\ - 162 \\ \hline \end{array}$$

6)
$$\begin{array}{r} 932 \\ - 443 \\ \hline \end{array}$$

7)
$$\begin{array}{r} 931 \\ - 887 \\ \hline \end{array}$$

8)
$$\begin{array}{r} 926 \\ - 879 \\ \hline \end{array}$$

9)
$$\begin{array}{r} 231 \\ - 192 \\ \hline \end{array}$$

10)
$$\begin{array}{r} 414 \\ - 135 \\ \hline \end{array}$$

11)
$$\begin{array}{r} 921 \\ - 732 \\ \hline \end{array}$$

12)
$$\begin{array}{r} 914 \\ - 837 \\ \hline \end{array}$$

1. _____
2. _____
3. _____
4. _____
5. _____
6. _____
7. _____
8. _____
9. _____
10. _____
11. _____
12. _____



Solve each problem.

Answers

$$\begin{array}{r} 1) \quad 276 \\ - 187 \\ \hline \end{array}$$

$$\begin{array}{r} 2) \quad 952 \\ - 866 \\ \hline \end{array}$$

$$\begin{array}{r} 3) \quad 661 \\ - 284 \\ \hline \end{array}$$

$$\begin{array}{r} 4) \quad 886 \\ - 698 \\ \hline \end{array}$$

$$\begin{array}{r} 5) \quad 923 \\ - 134 \\ \hline \end{array}$$

$$\begin{array}{r} 6) \quad 926 \\ - 797 \\ \hline \end{array}$$

$$\begin{array}{r} 7) \quad 911 \\ - 834 \\ \hline \end{array}$$

$$\begin{array}{r} 8) \quad 746 \\ - 358 \\ \hline \end{array}$$

$$\begin{array}{r} 9) \quad 961 \\ - 692 \\ \hline \end{array}$$

$$\begin{array}{r} 10) \quad 813 \\ - 465 \\ \hline \end{array}$$

$$\begin{array}{r} 11) \quad 921 \\ - 835 \\ \hline \end{array}$$

$$\begin{array}{r} 12) \quad 732 \\ - 653 \\ \hline \end{array}$$

$$\begin{array}{r} 13) \quad 638 \\ - 359 \\ \hline \end{array}$$

$$\begin{array}{r} 14) \quad 627 \\ - 389 \\ \hline \end{array}$$

$$\begin{array}{r} 15) \quad 831 \\ - 744 \\ \hline \end{array}$$

$$\begin{array}{r} 16) \quad 862 \\ - 373 \\ \hline \end{array}$$

$$\begin{array}{r} 17) \quad 653 \\ - 366 \\ \hline \end{array}$$

$$\begin{array}{r} 18) \quad 843 \\ - 776 \\ \hline \end{array}$$

$$\begin{array}{r} 19) \quad 652 \\ - 273 \\ \hline \end{array}$$

$$\begin{array}{r} 20) \quad 622 \\ - 434 \\ \hline \end{array}$$

1. _____
2. _____
3. _____
4. _____
5. _____
6. _____
7. _____
8. _____
9. _____
10. _____
11. _____
12. _____
13. _____
14. _____
15. _____
16. _____
17. _____
18. _____
19. _____
20. _____



Solve each problem.

$$\begin{array}{r} 1) \quad 276 \\ - 187 \\ \hline 89 \end{array}$$

$$\begin{array}{r} 2) \quad 952 \\ - 866 \\ \hline 86 \end{array}$$

$$\begin{array}{r} 3) \quad 661 \\ - 284 \\ \hline 377 \end{array}$$

$$\begin{array}{r} 4) \quad 886 \\ - 698 \\ \hline 188 \end{array}$$

$$\begin{array}{r} 5) \quad 923 \\ - 134 \\ \hline 789 \end{array}$$

$$\begin{array}{r} 6) \quad 926 \\ - 797 \\ \hline 129 \end{array}$$

$$\begin{array}{r} 7) \quad 911 \\ - 834 \\ \hline 77 \end{array}$$

$$\begin{array}{r} 8) \quad 746 \\ - 358 \\ \hline 388 \end{array}$$

$$\begin{array}{r} 9) \quad 961 \\ - 692 \\ \hline 269 \end{array}$$

$$\begin{array}{r} 10) \quad 813 \\ - 465 \\ \hline 348 \end{array}$$

$$\begin{array}{r} 11) \quad 921 \\ - 835 \\ \hline 86 \end{array}$$

$$\begin{array}{r} 12) \quad 732 \\ - 653 \\ \hline 79 \end{array}$$

$$\begin{array}{r} 13) \quad 638 \\ - 359 \\ \hline 279 \end{array}$$

$$\begin{array}{r} 14) \quad 627 \\ - 389 \\ \hline 238 \end{array}$$

$$\begin{array}{r} 15) \quad 831 \\ - 744 \\ \hline 87 \end{array}$$

$$\begin{array}{r} 16) \quad 862 \\ - 373 \\ \hline 489 \end{array}$$

$$\begin{array}{r} 17) \quad 653 \\ - 366 \\ \hline 287 \end{array}$$

$$\begin{array}{r} 18) \quad 843 \\ - 776 \\ \hline 67 \end{array}$$

$$\begin{array}{r} 19) \quad 652 \\ - 273 \\ \hline 379 \end{array}$$

$$\begin{array}{r} 20) \quad 622 \\ - 434 \\ \hline 188 \end{array}$$

Answers1. 892. 863. 3774. 1885. 7896. 1297. 778. 3889. 26910. 34811. 8612. 7913. 27914. 23815. 8716. 48917. 28718. 6719. 37920. 188



Solve each problem.

Answers

188

79

89

86

789

86

348

269

377

77

388

129

1. _____

2. _____

3. _____

4. _____

5. _____

6. _____

7. _____

8. _____

9. _____

10. _____

11. _____

12. _____

$$\begin{array}{r} 1) \quad 276 \\ - 187 \\ \hline \end{array}$$

$$\begin{array}{r} 2) \quad 952 \\ - 866 \\ \hline \end{array}$$

$$\begin{array}{r} 3) \quad 661 \\ - 284 \\ \hline \end{array}$$

$$\begin{array}{r} 4) \quad 886 \\ - 698 \\ \hline \end{array}$$

$$\begin{array}{r} 5) \quad 923 \\ - 134 \\ \hline \end{array}$$

$$\begin{array}{r} 6) \quad 926 \\ - 797 \\ \hline \end{array}$$

$$\begin{array}{r} 7) \quad 911 \\ - 834 \\ \hline \end{array}$$

$$\begin{array}{r} 8) \quad 746 \\ - 358 \\ \hline \end{array}$$

$$\begin{array}{r} 9) \quad 961 \\ - 692 \\ \hline \end{array}$$

$$\begin{array}{r} 10) \quad 813 \\ - 465 \\ \hline \end{array}$$

$$\begin{array}{r} 11) \quad 921 \\ - 835 \\ \hline \end{array}$$

$$\begin{array}{r} 12) \quad 732 \\ - 653 \\ \hline \end{array}$$



Solve each problem.

Answers

1)
$$\begin{array}{r} 931 \\ - 763 \\ \hline \end{array}$$

2)
$$\begin{array}{r} 611 \\ - 523 \\ \hline \end{array}$$

3)
$$\begin{array}{r} 964 \\ - 478 \\ \hline \end{array}$$

4)
$$\begin{array}{r} 815 \\ - 449 \\ \hline \end{array}$$

5)
$$\begin{array}{r} 911 \\ - 262 \\ \hline \end{array}$$

6)
$$\begin{array}{r} 917 \\ - 379 \\ \hline \end{array}$$

7)
$$\begin{array}{r} 235 \\ - 166 \\ \hline \end{array}$$

8)
$$\begin{array}{r} 711 \\ - 526 \\ \hline \end{array}$$

9)
$$\begin{array}{r} 942 \\ - 676 \\ \hline \end{array}$$

10)
$$\begin{array}{r} 816 \\ - 738 \\ \hline \end{array}$$

11)
$$\begin{array}{r} 422 \\ - 193 \\ \hline \end{array}$$

12)
$$\begin{array}{r} 814 \\ - 439 \\ \hline \end{array}$$

13)
$$\begin{array}{r} 814 \\ - 245 \\ \hline \end{array}$$

14)
$$\begin{array}{r} 934 \\ - 879 \\ \hline \end{array}$$

15)
$$\begin{array}{r} 813 \\ - 768 \\ \hline \end{array}$$

16)
$$\begin{array}{r} 836 \\ - 647 \\ \hline \end{array}$$

17)
$$\begin{array}{r} 761 \\ - 372 \\ \hline \end{array}$$

18)
$$\begin{array}{r} 922 \\ - 278 \\ \hline \end{array}$$

19)
$$\begin{array}{r} 732 \\ - 548 \\ \hline \end{array}$$

20)
$$\begin{array}{r} 412 \\ - 135 \\ \hline \end{array}$$

1. _____
2. _____
3. _____
4. _____
5. _____
6. _____
7. _____
8. _____
9. _____
10. _____
11. _____
12. _____
13. _____
14. _____
15. _____
16. _____
17. _____
18. _____
19. _____
20. _____



Solve each problem.

$$\begin{array}{r} 1) \quad 931 \\ - 763 \\ \hline 168 \end{array}$$

$$\begin{array}{r} 2) \quad 611 \\ - 523 \\ \hline 88 \end{array}$$

$$\begin{array}{r} 3) \quad 964 \\ - 478 \\ \hline 486 \end{array}$$

$$\begin{array}{r} 4) \quad 815 \\ - 449 \\ \hline 366 \end{array}$$

$$\begin{array}{r} 5) \quad 911 \\ - 262 \\ \hline 649 \end{array}$$

$$\begin{array}{r} 6) \quad 917 \\ - 379 \\ \hline 538 \end{array}$$

$$\begin{array}{r} 7) \quad 235 \\ - 166 \\ \hline 69 \end{array}$$

$$\begin{array}{r} 8) \quad 711 \\ - 526 \\ \hline 185 \end{array}$$

$$\begin{array}{r} 9) \quad 942 \\ - 676 \\ \hline 266 \end{array}$$

$$\begin{array}{r} 10) \quad 816 \\ - 738 \\ \hline 78 \end{array}$$

$$\begin{array}{r} 11) \quad 422 \\ - 193 \\ \hline 229 \end{array}$$

$$\begin{array}{r} 12) \quad 814 \\ - 439 \\ \hline 375 \end{array}$$

$$\begin{array}{r} 13) \quad 814 \\ - 245 \\ \hline 569 \end{array}$$

$$\begin{array}{r} 14) \quad 934 \\ - 879 \\ \hline 55 \end{array}$$

$$\begin{array}{r} 15) \quad 813 \\ - 768 \\ \hline 45 \end{array}$$

$$\begin{array}{r} 16) \quad 836 \\ - 647 \\ \hline 189 \end{array}$$

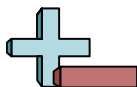
$$\begin{array}{r} 17) \quad 761 \\ - 372 \\ \hline 389 \end{array}$$

$$\begin{array}{r} 18) \quad 922 \\ - 278 \\ \hline 644 \end{array}$$

$$\begin{array}{r} 19) \quad 732 \\ - 548 \\ \hline 184 \end{array}$$

$$\begin{array}{r} 20) \quad 412 \\ - 135 \\ \hline 277 \end{array}$$

Answers1. 1682. 883. 4864. 3665. 6496. 5387. 698. 1859. 26610. 7811. 22912. 37513. 56914. 5515. 4516. 18917. 38918. 64419. 18420. 277



Solve each problem.

Answers

229

78

538

366

88

185

375

69

266

649

168

486

1. _____

2. _____

3. _____

4. _____

5. _____

6. _____

7. _____

8. _____

9. _____

10. _____

11. _____

12. _____

$$\begin{array}{r} 1) \quad 931 \\ - 763 \\ \hline \end{array}$$

$$\begin{array}{r} 2) \quad 611 \\ - 523 \\ \hline \end{array}$$

$$\begin{array}{r} 3) \quad 964 \\ - 478 \\ \hline \end{array}$$

$$\begin{array}{r} 4) \quad 815 \\ - 449 \\ \hline \end{array}$$

$$\begin{array}{r} 5) \quad 911 \\ - 262 \\ \hline \end{array}$$

$$\begin{array}{r} 6) \quad 917 \\ - 379 \\ \hline \end{array}$$

$$\begin{array}{r} 7) \quad 235 \\ - 166 \\ \hline \end{array}$$

$$\begin{array}{r} 8) \quad 711 \\ - 526 \\ \hline \end{array}$$

$$\begin{array}{r} 9) \quad 942 \\ - 676 \\ \hline \end{array}$$

$$\begin{array}{r} 10) \quad 816 \\ - 738 \\ \hline \end{array}$$

$$\begin{array}{r} 11) \quad 422 \\ - 193 \\ \hline \end{array}$$

$$\begin{array}{r} 12) \quad 814 \\ - 439 \\ \hline \end{array}$$



Solve each problem.

Answers

1)
$$\begin{array}{r} 611 \\ - 484 \\ \hline \end{array}$$

2)
$$\begin{array}{r} 441 \\ - 352 \\ \hline \end{array}$$

3)
$$\begin{array}{r} 614 \\ - 138 \\ \hline \end{array}$$

4)
$$\begin{array}{r} 622 \\ - 374 \\ \hline \end{array}$$

5)
$$\begin{array}{r} 954 \\ - 896 \\ \hline \end{array}$$

6)
$$\begin{array}{r} 921 \\ - 856 \\ \hline \end{array}$$

7)
$$\begin{array}{r} 623 \\ - 534 \\ \hline \end{array}$$

8)
$$\begin{array}{r} 922 \\ - 153 \\ \hline \end{array}$$

9)
$$\begin{array}{r} 951 \\ - 888 \\ \hline \end{array}$$

10)
$$\begin{array}{r} 614 \\ - 447 \\ \hline \end{array}$$

11)
$$\begin{array}{r} 424 \\ - 365 \\ \hline \end{array}$$

12)
$$\begin{array}{r} 653 \\ - 167 \\ \hline \end{array}$$

13)
$$\begin{array}{r} 774 \\ - 387 \\ \hline \end{array}$$

14)
$$\begin{array}{r} 916 \\ - 728 \\ \hline \end{array}$$

15)
$$\begin{array}{r} 571 \\ - 486 \\ \hline \end{array}$$

16)
$$\begin{array}{r} 625 \\ - 457 \\ \hline \end{array}$$

17)
$$\begin{array}{r} 216 \\ - 187 \\ \hline \end{array}$$

18)
$$\begin{array}{r} 545 \\ - 269 \\ \hline \end{array}$$

19)
$$\begin{array}{r} 923 \\ - 835 \\ \hline \end{array}$$

20)
$$\begin{array}{r} 631 \\ - 356 \\ \hline \end{array}$$

1. _____

2. _____

3. _____

4. _____

5. _____

6. _____

7. _____

8. _____

9. _____

10. _____

11. _____

12. _____

13. _____

14. _____

15. _____

16. _____

17. _____

18. _____

19. _____

20. _____



Solve each problem.

$$\begin{array}{r} 1) \quad 611 \\ - 484 \\ \hline 127 \end{array}$$

$$\begin{array}{r} 2) \quad 441 \\ - 352 \\ \hline 89 \end{array}$$

$$\begin{array}{r} 3) \quad 614 \\ - 138 \\ \hline 476 \end{array}$$

$$\begin{array}{r} 4) \quad 622 \\ - 374 \\ \hline 248 \end{array}$$

$$\begin{array}{r} 5) \quad 954 \\ - 896 \\ \hline 58 \end{array}$$

$$\begin{array}{r} 6) \quad 921 \\ - 856 \\ \hline 65 \end{array}$$

$$\begin{array}{r} 7) \quad 623 \\ - 534 \\ \hline 89 \end{array}$$

$$\begin{array}{r} 8) \quad 922 \\ - 153 \\ \hline 769 \end{array}$$

$$\begin{array}{r} 9) \quad 951 \\ - 888 \\ \hline 63 \end{array}$$

$$\begin{array}{r} 10) \quad 614 \\ - 447 \\ \hline 167 \end{array}$$

$$\begin{array}{r} 11) \quad 424 \\ - 365 \\ \hline 59 \end{array}$$

$$\begin{array}{r} 12) \quad 653 \\ - 167 \\ \hline 486 \end{array}$$

$$\begin{array}{r} 13) \quad 774 \\ - 387 \\ \hline 387 \end{array}$$

$$\begin{array}{r} 14) \quad 916 \\ - 728 \\ \hline 188 \end{array}$$

$$\begin{array}{r} 15) \quad 571 \\ - 486 \\ \hline 85 \end{array}$$

$$\begin{array}{r} 16) \quad 625 \\ - 457 \\ \hline 168 \end{array}$$

$$\begin{array}{r} 17) \quad 216 \\ - 187 \\ \hline 29 \end{array}$$

$$\begin{array}{r} 18) \quad 545 \\ - 269 \\ \hline 276 \end{array}$$

$$\begin{array}{r} 19) \quad 923 \\ - 835 \\ \hline 88 \end{array}$$

$$\begin{array}{r} 20) \quad 631 \\ - 356 \\ \hline 275 \end{array}$$

Answers

1. 127

2. 89

3. 476

4. 248

5. 58

6. 65

7. 89

8. 769

9. 63

10. 167

11. 59

12. 486

13. 387

14. 188

15. 85

16. 168

17. 29

18. 276

19. 88

20. 275



Solve each problem.

Answers

58	167	248	65
63	769	476	486
127	89	59	89

$$\begin{array}{r} 1) \quad 611 \\ - 484 \\ \hline \end{array}$$

$$\begin{array}{r} 2) \quad 441 \\ - 352 \\ \hline \end{array}$$

$$\begin{array}{r} 3) \quad 614 \\ - 138 \\ \hline \end{array}$$

$$\begin{array}{r} 4) \quad 622 \\ - 374 \\ \hline \end{array}$$

$$\begin{array}{r} 5) \quad 954 \\ - 896 \\ \hline \end{array}$$

$$\begin{array}{r} 6) \quad 921 \\ - 856 \\ \hline \end{array}$$

$$\begin{array}{r} 7) \quad 623 \\ - 534 \\ \hline \end{array}$$

$$\begin{array}{r} 8) \quad 922 \\ - 153 \\ \hline \end{array}$$

$$\begin{array}{r} 9) \quad 951 \\ - 888 \\ \hline \end{array}$$

$$\begin{array}{r} 10) \quad 614 \\ - 447 \\ \hline \end{array}$$

$$\begin{array}{r} 11) \quad 424 \\ - 365 \\ \hline \end{array}$$

$$\begin{array}{r} 12) \quad 653 \\ - 167 \\ \hline \end{array}$$

1. _____
2. _____
3. _____
4. _____
5. _____
6. _____
7. _____
8. _____
9. _____
10. _____
11. _____
12. _____



Solve each problem.

Answers

$$\begin{array}{r} 1) \quad 823 \\ - 635 \\ \hline \end{array}$$

$$\begin{array}{r} 2) \quad 751 \\ - 572 \\ \hline \end{array}$$

$$\begin{array}{r} 3) \quad 423 \\ - 336 \\ \hline \end{array}$$

$$\begin{array}{r} 4) \quad 914 \\ - 845 \\ \hline \end{array}$$

$$\begin{array}{r} 5) \quad 684 \\ - 597 \\ \hline \end{array}$$

$$\begin{array}{r} 6) \quad 612 \\ - 263 \\ \hline \end{array}$$

$$\begin{array}{r} 7) \quad 857 \\ - 489 \\ \hline \end{array}$$

$$\begin{array}{r} 8) \quad 712 \\ - 628 \\ \hline \end{array}$$

$$\begin{array}{r} 9) \quad 716 \\ - 437 \\ \hline \end{array}$$

$$\begin{array}{r} 10) \quad 912 \\ - 138 \\ \hline \end{array}$$

$$\begin{array}{r} 11) \quad 912 \\ - 444 \\ \hline \end{array}$$

$$\begin{array}{r} 12) \quad 881 \\ - 792 \\ \hline \end{array}$$

$$\begin{array}{r} 13) \quad 616 \\ - 539 \\ \hline \end{array}$$

$$\begin{array}{r} 14) \quad 632 \\ - 346 \\ \hline \end{array}$$

$$\begin{array}{r} 15) \quad 311 \\ - 195 \\ \hline \end{array}$$

$$\begin{array}{r} 16) \quad 811 \\ - 562 \\ \hline \end{array}$$

$$\begin{array}{r} 17) \quad 622 \\ - 583 \\ \hline \end{array}$$

$$\begin{array}{r} 18) \quad 721 \\ - 552 \\ \hline \end{array}$$

$$\begin{array}{r} 19) \quad 922 \\ - 368 \\ \hline \end{array}$$

$$\begin{array}{r} 20) \quad 923 \\ - 186 \\ \hline \end{array}$$

1. _____

2. _____

3. _____

4. _____

5. _____

6. _____

7. _____

8. _____

9. _____

10. _____

11. _____

12. _____

13. _____

14. _____

15. _____

16. _____

17. _____

18. _____

19. _____

20. _____



Solve each problem.

$$\begin{array}{r} 1) \quad 823 \\ - 635 \\ \hline 188 \end{array}$$

$$\begin{array}{r} 2) \quad 751 \\ - 572 \\ \hline 179 \end{array}$$

$$\begin{array}{r} 3) \quad 423 \\ - 336 \\ \hline 87 \end{array}$$

$$\begin{array}{r} 4) \quad 914 \\ - 845 \\ \hline 69 \end{array}$$

$$\begin{array}{r} 5) \quad 684 \\ - 597 \\ \hline 87 \end{array}$$

$$\begin{array}{r} 6) \quad 612 \\ - 263 \\ \hline 349 \end{array}$$

$$\begin{array}{r} 7) \quad 857 \\ - 489 \\ \hline 368 \end{array}$$

$$\begin{array}{r} 8) \quad 712 \\ - 628 \\ \hline 84 \end{array}$$

$$\begin{array}{r} 9) \quad 716 \\ - 437 \\ \hline 279 \end{array}$$

$$\begin{array}{r} 10) \quad 912 \\ - 138 \\ \hline 774 \end{array}$$

$$\begin{array}{r} 11) \quad 912 \\ - 444 \\ \hline 468 \end{array}$$

$$\begin{array}{r} 12) \quad 881 \\ - 792 \\ \hline 89 \end{array}$$

$$\begin{array}{r} 13) \quad 616 \\ - 539 \\ \hline 77 \end{array}$$

$$\begin{array}{r} 14) \quad 632 \\ - 346 \\ \hline 286 \end{array}$$

$$\begin{array}{r} 15) \quad 311 \\ - 195 \\ \hline 116 \end{array}$$

$$\begin{array}{r} 16) \quad 811 \\ - 562 \\ \hline 249 \end{array}$$

$$\begin{array}{r} 17) \quad 622 \\ - 583 \\ \hline 39 \end{array}$$

$$\begin{array}{r} 18) \quad 721 \\ - 552 \\ \hline 169 \end{array}$$

$$\begin{array}{r} 19) \quad 922 \\ - 368 \\ \hline 554 \end{array}$$

$$\begin{array}{r} 20) \quad 923 \\ - 186 \\ \hline 737 \end{array}$$

Answers1. 1882. 1793. 874. 695. 876. 3497. 3688. 849. 27910. 77411. 46812. 8913. 7714. 28615. 11616. 24917. 3918. 16919. 55420. 737



Solve each problem.

Answers

179

87

69

468

89

87

774

188

368

84

279

349

1. _____

2. _____

3. _____

4. _____

5. _____

6. _____

7. _____

8. _____

9. _____

10. _____

11. _____

12. _____

$$\begin{array}{r} 1) \quad 823 \\ - 635 \\ \hline \end{array}$$

$$\begin{array}{r} 2) \quad 751 \\ - 572 \\ \hline \end{array}$$

$$\begin{array}{r} 3) \quad 423 \\ - 336 \\ \hline \end{array}$$

$$\begin{array}{r} 4) \quad 914 \\ - 845 \\ \hline \end{array}$$

$$\begin{array}{r} 5) \quad 684 \\ - 597 \\ \hline \end{array}$$

$$\begin{array}{r} 6) \quad 612 \\ - 263 \\ \hline \end{array}$$

$$\begin{array}{r} 7) \quad 857 \\ - 489 \\ \hline \end{array}$$

$$\begin{array}{r} 8) \quad 712 \\ - 628 \\ \hline \end{array}$$

$$\begin{array}{r} 9) \quad 716 \\ - 437 \\ \hline \end{array}$$

$$\begin{array}{r} 10) \quad 912 \\ - 138 \\ \hline \end{array}$$

$$\begin{array}{r} 11) \quad 912 \\ - 444 \\ \hline \end{array}$$

$$\begin{array}{r} 12) \quad 881 \\ - 792 \\ \hline \end{array}$$



Solve each problem.

Answers

$$\begin{array}{r} 1) \quad 942 \\ - 556 \\ \hline \end{array}$$

$$\begin{array}{r} 2) \quad 921 \\ - 695 \\ \hline \end{array}$$

$$\begin{array}{r} 3) \quad 812 \\ - 393 \\ \hline \end{array}$$

$$\begin{array}{r} 4) \quad 913 \\ - 778 \\ \hline \end{array}$$

$$\begin{array}{r} 5) \quad 662 \\ - 379 \\ \hline \end{array}$$

$$\begin{array}{r} 6) \quad 841 \\ - 572 \\ \hline \end{array}$$

$$\begin{array}{r} 7) \quad 842 \\ - 457 \\ \hline \end{array}$$

$$\begin{array}{r} 8) \quad 931 \\ - 892 \\ \hline \end{array}$$

$$\begin{array}{r} 9) \quad 922 \\ - 748 \\ \hline \end{array}$$

$$\begin{array}{r} 10) \quad 911 \\ - 567 \\ \hline \end{array}$$

$$\begin{array}{r} 11) \quad 211 \\ - 132 \\ \hline \end{array}$$

$$\begin{array}{r} 12) \quad 611 \\ - 228 \\ \hline \end{array}$$

$$\begin{array}{r} 13) \quad 411 \\ - 323 \\ \hline \end{array}$$

$$\begin{array}{r} 14) \quad 671 \\ - 592 \\ \hline \end{array}$$

$$\begin{array}{r} 15) \quad 642 \\ - 553 \\ \hline \end{array}$$

$$\begin{array}{r} 16) \quad 813 \\ - 564 \\ \hline \end{array}$$

$$\begin{array}{r} 17) \quad 882 \\ - 793 \\ \hline \end{array}$$

$$\begin{array}{r} 18) \quad 523 \\ - 234 \\ \hline \end{array}$$

$$\begin{array}{r} 19) \quad 525 \\ - 157 \\ \hline \end{array}$$

$$\begin{array}{r} 20) \quad 711 \\ - 223 \\ \hline \end{array}$$

1. _____
2. _____
3. _____
4. _____
5. _____
6. _____
7. _____
8. _____
9. _____
10. _____
11. _____
12. _____
13. _____
14. _____
15. _____
16. _____
17. _____
18. _____
19. _____
20. _____



Solve each problem.

$$\begin{array}{r} 1) \quad 942 \\ - 556 \\ \hline 386 \end{array}$$

$$\begin{array}{r} 2) \quad 921 \\ - 695 \\ \hline 226 \end{array}$$

$$\begin{array}{r} 3) \quad 812 \\ - 393 \\ \hline 419 \end{array}$$

$$\begin{array}{r} 4) \quad 913 \\ - 778 \\ \hline 135 \end{array}$$

$$\begin{array}{r} 5) \quad 662 \\ - 379 \\ \hline 283 \end{array}$$

$$\begin{array}{r} 6) \quad 841 \\ - 572 \\ \hline 269 \end{array}$$

$$\begin{array}{r} 7) \quad 842 \\ - 457 \\ \hline 385 \end{array}$$

$$\begin{array}{r} 8) \quad 931 \\ - 892 \\ \hline 39 \end{array}$$

$$\begin{array}{r} 9) \quad 922 \\ - 748 \\ \hline 174 \end{array}$$

$$\begin{array}{r} 10) \quad 911 \\ - 567 \\ \hline 344 \end{array}$$

$$\begin{array}{r} 11) \quad 211 \\ - 132 \\ \hline 79 \end{array}$$

$$\begin{array}{r} 12) \quad 611 \\ - 228 \\ \hline 383 \end{array}$$

$$\begin{array}{r} 13) \quad 411 \\ - 323 \\ \hline 88 \end{array}$$

$$\begin{array}{r} 14) \quad 671 \\ - 592 \\ \hline 79 \end{array}$$

$$\begin{array}{r} 15) \quad 642 \\ - 553 \\ \hline 89 \end{array}$$

$$\begin{array}{r} 16) \quad 813 \\ - 564 \\ \hline 249 \end{array}$$

$$\begin{array}{r} 17) \quad 882 \\ - 793 \\ \hline 89 \end{array}$$

$$\begin{array}{r} 18) \quad 523 \\ - 234 \\ \hline 289 \end{array}$$

$$\begin{array}{r} 19) \quad 525 \\ - 157 \\ \hline 368 \end{array}$$

$$\begin{array}{r} 20) \quad 711 \\ - 223 \\ \hline 488 \end{array}$$

Answers1. 3862. 2263. 4194. 1355. 2836. 2697. 3858. 399. 17410. 34411. 7912. 38313. 8814. 7915. 8916. 24917. 8918. 28919. 36820. 488



Solve each problem.

Answers

386

385

283

344

383

79

39

226

269

419

135

174

1. _____

2. _____

3. _____

4. _____

5. _____

6. _____

7. _____

8. _____

9. _____

10. _____

11. _____

12. _____

$$\begin{array}{r} 1) \quad 942 \\ - 556 \\ \hline \end{array}$$

$$\begin{array}{r} 2) \quad 921 \\ - 695 \\ \hline \end{array}$$

$$\begin{array}{r} 3) \quad 812 \\ - 393 \\ \hline \end{array}$$

$$\begin{array}{r} 4) \quad 913 \\ - 778 \\ \hline \end{array}$$

$$\begin{array}{r} 5) \quad 662 \\ - 379 \\ \hline \end{array}$$

$$\begin{array}{r} 6) \quad 841 \\ - 572 \\ \hline \end{array}$$

$$\begin{array}{r} 7) \quad 842 \\ - 457 \\ \hline \end{array}$$

$$\begin{array}{r} 8) \quad 931 \\ - 892 \\ \hline \end{array}$$

$$\begin{array}{r} 9) \quad 922 \\ - 748 \\ \hline \end{array}$$

$$\begin{array}{r} 10) \quad 911 \\ - 567 \\ \hline \end{array}$$

$$\begin{array}{r} 11) \quad 211 \\ - 132 \\ \hline \end{array}$$

$$\begin{array}{r} 12) \quad 611 \\ - 228 \\ \hline \end{array}$$